

## Basic Electronics BJT amplifiers

### Common-Emitter Fixed-Bias Configuration

1. For the network of Fig. 1:
  - a. Determine  $Z_i$  and  $Z_o$ .
  - b. Find  $A_v$ .
  - c. Repeat parts (a) and (b) with  $r_o = 20 \text{ k}\Omega$ .

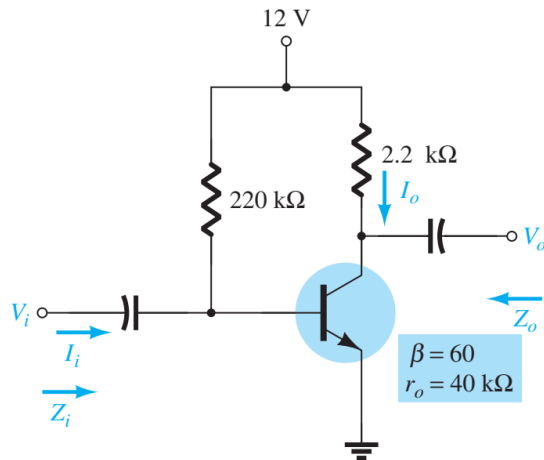


Fig.1

2. For the network of Fig. 2, determine  $V_{CC}$  for a voltage gain of  $A_v = -160$ .

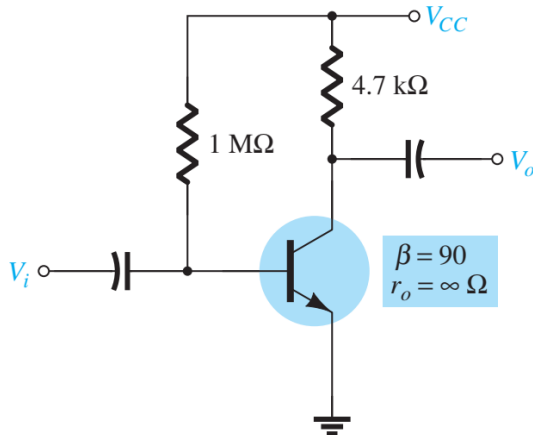


Fig.2

3. For the network of Fig. 3 :
  - a. Calculate  $I_B$ ,  $I_C$ , and  $r_e$ .
  - b. Determine  $Z_i$  and  $Z_o$ .
  - c. Calculate  $A_v$ .
  - d. Determine the effect of  $r_o = 30 \text{ k}\Omega$  on  $A_v$ .

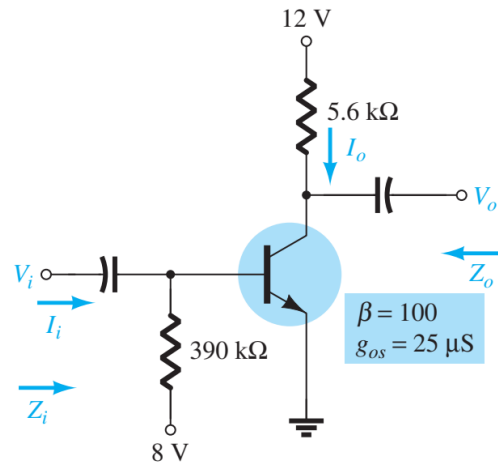


Fig.3

4. For the network of Fig. 3 , what value of  $RC$  will cut the voltage gain to half the value obtained in problem 3?

### Voltage-Divider Bias

5. For the network of Fig. 4 :
  - a. Determine  $r_e$ .
  - b. Calculate  $Z_i$  and  $Z_o$ .
  - c. Find  $A_v$ .
  - d. Repeat parts (b) and (c) with  $r_o = 25 \text{ k}\Omega$ .

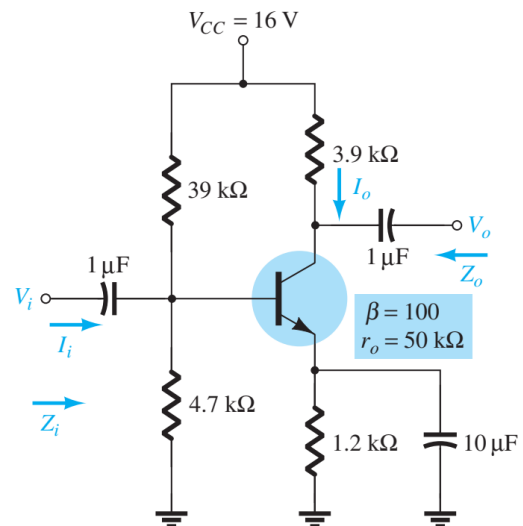


Fig.4

6. Determine  $V_{CC}$  for the network of Fig. 5 if  $A_v = -160$  and  $r_o = 100 \text{ k}\Omega$ .

## Basic Electronics BJT amplifiers

7. For the network of Fig. 6 :

- Determine  $r_e$ .
- Calculate  $V_B$  and  $V_C$ .
- Determine  $Z_i$  and  $A_v = V_o/V_i$ .

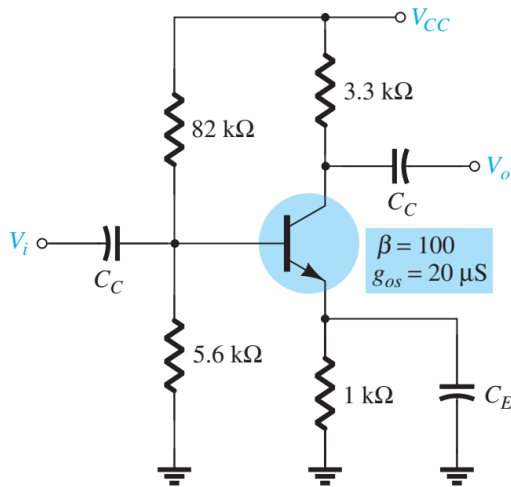


Fig.5

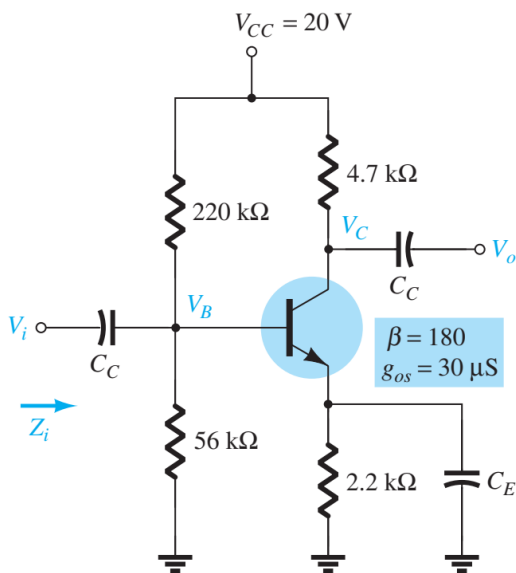


Fig.6

8. For the network of Fig. 7 :

- Determine  $r_e$ .
  - Find  $Z_i$  and  $Z_o$ .
  - Calculate  $A_v$ .
  - Repeat parts (b) and (c) with  $r_o = 20$  k.
9. Repeat Problem 8 with  $R_E$  bypassed.  
Compare results.

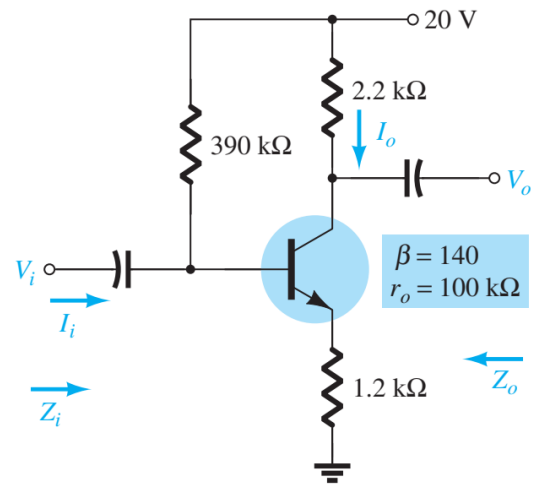


Fig.7

10. For the network of Fig. 8 :

- Determine  $r_e$ .
- Find  $Z_i$  and  $A_v$ .

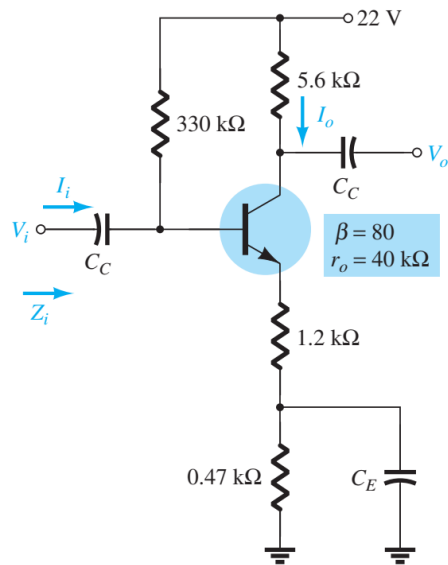


Fig.8