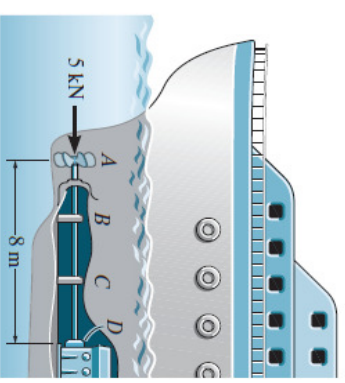


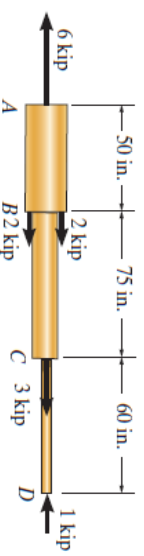


Chương 4: Bài tập_KÉO – NÉN ĐÚNG TÂM

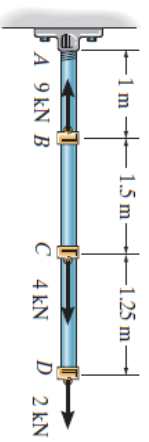
- 4-1. The ship is pushed through the water using an A-36 steel propeller shaft that is 8 m long, measured from the propeller to the thrust bearing D at the engine. If it has an outer diameter of 400 mm and a wall thickness of 50 mm, determine the amount of axial contraction of the shaft when the propeller exerts a force on the shaft of 5 kN. The bearings at B and C are journal bearings.



- 4-2. The copper shaft is subjected to the axial loads shown. Determine the displacement of end A with respect to end D . The diameters of each segment are $d_{AB} = 3$ in., $d_{BC} = 2$ in., and $d_{CD} = 1$ in. Take $E_{cu} = 18(10^3)$ ksi.

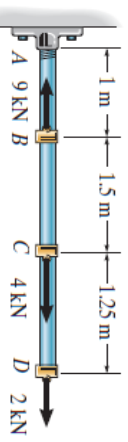


- 4-3. The A-36 steel rod is subjected to the loading shown. If the cross-sectional area of the rod is 50 mm^2 , determine the displacement of its end D . Neglect the size of the couplings at B , C , and D .

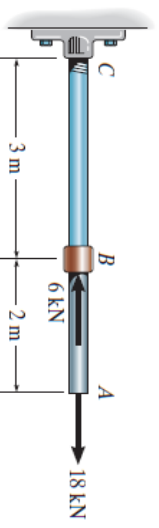


Chương 4: Bài tập_KÉO – NÉN ĐÚNG TÂM

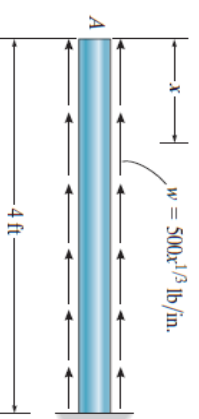
- *4-4. The A-36 steel rod is subjected to the loading shown. If the cross-sectional area of the rod is 50 mm^2 , determine the displacement of C . Neglect the size of the couplings at B , C , and D .



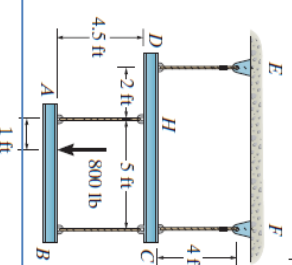
- 4-5. The assembly consists of a steel rod CB and an aluminum rod BA , each having a diameter of 12 mm. If the rod is subjected to the axial loadings at A and at the coupling B , determine the displacement of the coupling B and the end A . The unstretched length of each segment is shown in the figure. Neglect the size of the connections at B and C , and assume that they are rigid. $E_{st} = 200 \text{ GPa}$, $E_{al} = 70 \text{ GPa}$.



- 4-6. The bar has a cross-sectional area of 3 in^2 , and $E = 35(10^3)$ ksi. Determine the displacement of its end A when it is subjected to the distributed loading.



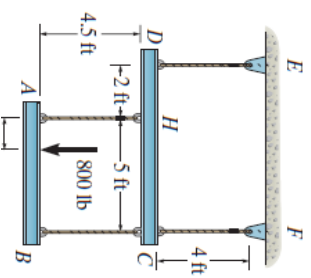
- 4-7. The load of 800 lb is supported by the four 304 stainless steel wires that are connected to the rigid members AB and DC . Determine the vertical displacement of the load if the members were horizontal before the load was applied. Each wire has a cross-sectional area of 0.05 in^2 .



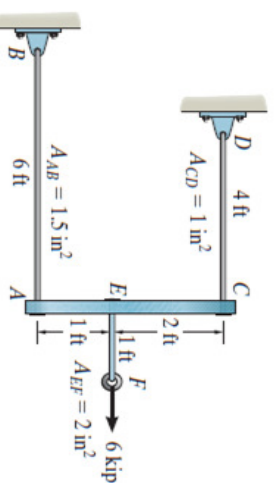


Chương 4: Bài tập_KÉO – NÉN ĐÚNG TÂM

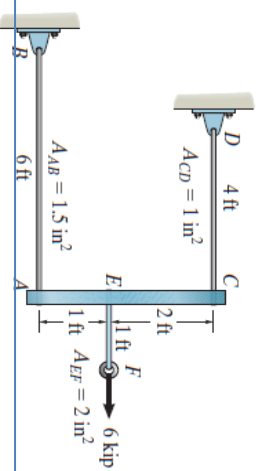
*4-8. The load of 800 lb is supported by the four 304 stainless steel wires that are connected to the rigid members AB and DC . Determine the angle of tilt of each member after the load is applied. The members were originally horizontal, and each wire has a cross-sectional area of 0.05 in^2 .



•4-9. The assembly consists of three titanium (Ti-6Al-4V) rods and a rigid bar AC . The cross-sectional area of each rod is given in the figure. If a force of 6 kip is applied to the ring F , determine the horizontal displacement of point F .



4-10. The assembly consists of three titanium (Ti-6Al-4V) rods and a rigid bar AC . The cross-sectional area of each rod is given in the figure. If a force of 6 kip is applied to the ring F , determine the angle of tilt of bar AC .



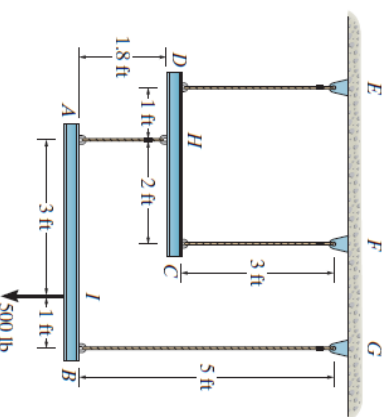
L7A_Cơ học vật liệu (215004)

3

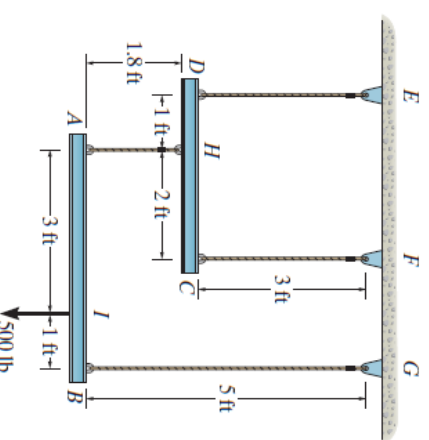


Chương 4: Bài tập_KÉO – NÉN ĐÚNG TÂM

4-11. The load is supported by the four 304 stainless steel wires that are connected to the rigid members AB and DC . Determine the vertical displacement of the 500-lb load if the members were originally horizontal when the load was applied. Each wire has a cross-sectional area of 0.025 in^2 .



*4-12. The load is supported by the four 304 stainless steel wires that are connected to the rigid members AB and DC . Determine the angle of tilt of each member after the 500-lb load is applied. The members were originally horizontal, and each wire has a cross-sectional area of 0.025 in^2 .

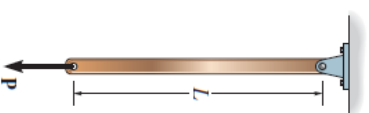


L7A_Cơ học vật liệu (215004)

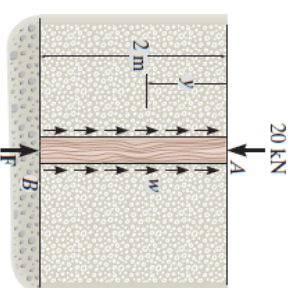


Chương 4: Bài tập_KÉO – NÉN ĐÚNG TÂM

- 4-13. The bar has a length L and cross-sectional area A . Determine its elongation due to the force \mathbf{P} and its own weight. The material has a specific weight γ (weight/volume) and a modulus of elasticity E .



- 4-14. The post is made of Douglas fir and has a diameter of 60 mm. If it is subjected to the load of 20 kN and the soil provides a frictional resistance that is uniformly distributed along its sides of $w = 4 \text{ kN/m}$, determine the force \mathbf{F} at its bottom needed for equilibrium. Also, what is the displacement of the top of the post A with respect to its bottom B ? Neglect the weight of the post.

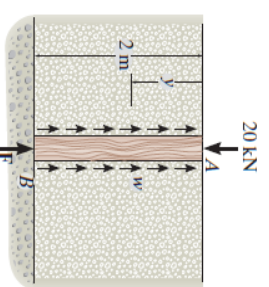


L7A_Cơ học vật liệu (215004)

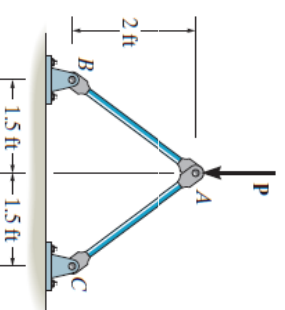


Chương 4: Bài tập_KÉO – NÉN ĐÚNG TÂM

- 4-15. The post is made of Douglas fir and has a diameter of 60 mm. If it is subjected to the load of 20 kN and the soil provides a frictional resistance that is distributed along its length and varies linearly from $w = 0$ at $y = 0$ to $w = 3 \text{ kN/m}$ at $y = 2 \text{ m}$, determine the force \mathbf{F} at its bottom needed for equilibrium. Also, what is the displacement of the top of the post A with respect to its bottom B ? Neglect the weight of the post.



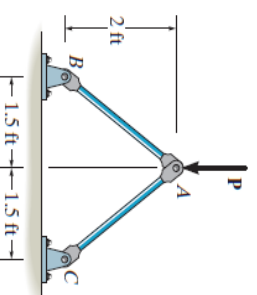
- *4-16. The linkage is made of two pin-connected A-36 steel members, each having a cross-sectional area of 1.5 in^2 . If a vertical force of $P = 50 \text{ kip}$ is applied to point A , determine its vertical displacement at A .



- 4-17. The linkage is made of two pin-connected A-36 steel members, each having a cross-sectional area of 1.5 in^2 . Determine the magnitude of the force \mathbf{P} needed to displace point A 0.025 in. downward.

Analysing the equilibrium of joint A by referring to its FBD , Fig. a

$$\sum F_x = 0; \quad F_{AC} \left(\frac{3}{5} \right) - F_{AB} \left(\frac{3}{5} \right) = 0 \quad F_{AC} = F_{AB} = F$$

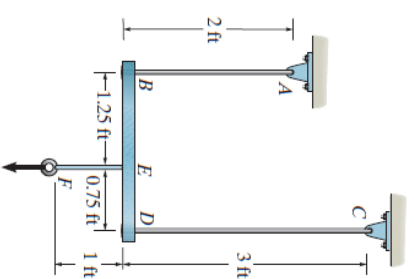


L7A_Cơ học vật liệu (215004)

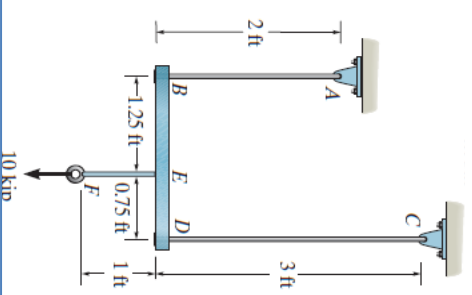


Chương 4: Bài tập_KÉO – NÉN ĐÚNG TÂM

4-18. The assembly consists of two A-36 steel rods and a rigid bar BD . Each rod has a diameter of 0.75 in. If a force of 10 kip is applied to the bar as shown, determine the vertical displacement of the load.



4-19. The assembly consists of two A-36 steel rods and a rigid bar BD . Each rod has a diameter of 0.75 in. If a force of 10 kip is applied to the bar, determine the angle of tilt of the bar.

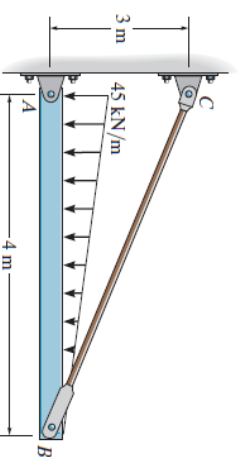


L7A_Cơ học vật liệu (215004)

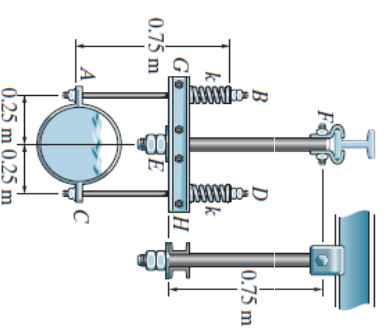


Chương 4: Bài tập_KÉO – NÉN ĐÚNG TÂM

*4-20. The rigid bar is supported by the pin-connected rod CB that has a cross-sectional area of 500 mm^2 and is made of A-36 steel. Determine the vertical displacement of the bar at B when the load is applied.



•4-21. A spring-supported pipe hanger consists of two springs which are originally unstretched and have a stiffness of $k = 60 \text{ kN/m}$, three 304 stainless steel rods, AB and CD , which have a diameter of 5 mm, and EF , which has a diameter of 12 mm, and a rigid beam GH . If the pipe and the fluid it carries have a total weight of 4 kN, determine the displacement of the pipe when it is attached to the support.

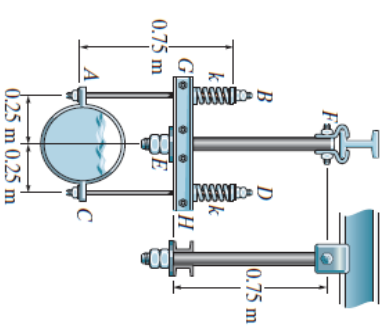


L7A_Cơ học vật liệu (215004)

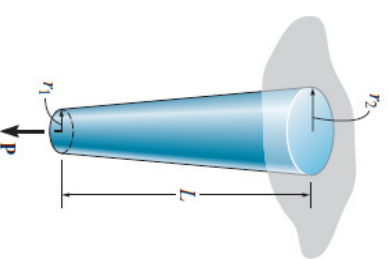


Chương 4: Bài tập_KÉO – NÉN ĐÚNG TÂM

4-22. A spring-supported pipe hanger consists of two springs, which are originally unstretched and have a stiffness of $k = 60 \text{ kN/m}$, three 304 stainless steel rods, AB and CD , which have a diameter of 5 mm, and EF , which has a diameter of 12 mm, and a rigid beam GH . If the pipe is displaced 82 mm when it is filled with fluid, determine the weight of the fluid.



4-23. The rod has a slight taper and length L . It is suspended from the ceiling and supports a load P at its end. Show that the displacement of its end due to this load is $\delta = PL/(\pi E r_1 r_2)$. Neglect the weight of the material. The modulus of elasticity is E .

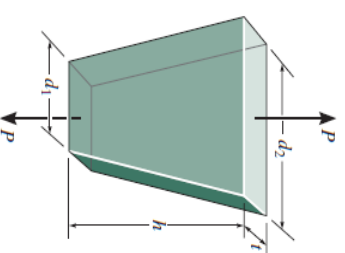


L7A_Cơ học vật liệu (215004)

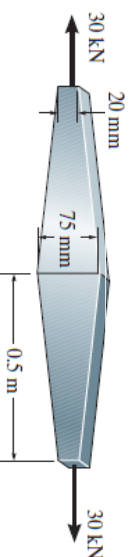


Chương 4: Bài tập_KÉO – NÉN ĐÚNG TÂM

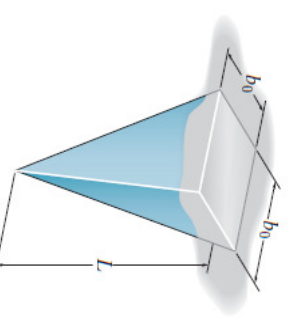
*4-24. Determine the relative displacement of one end of the tapered plate with respect to the other end when it is subjected to an axial load P .



4-25. Determine the elongation of the A-36 steel member when it is subjected to an axial force of 30 kN. The member is 10 mm thick. Use the result of Prob. 4-24.



4-26. The casting is made of a material that has a specific weight γ and modulus of elasticity E . If it is formed into a pyramid having the dimensions shown, determine how far its end is displaced due to gravity when it is suspended in the vertical position.

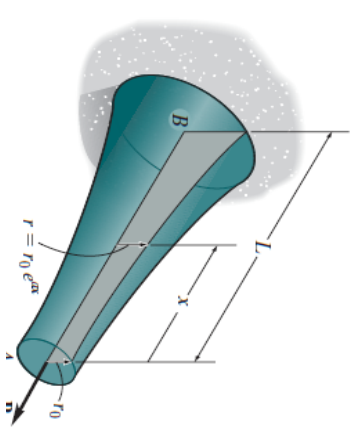


L7A_Cơ học vật liệu (215004)

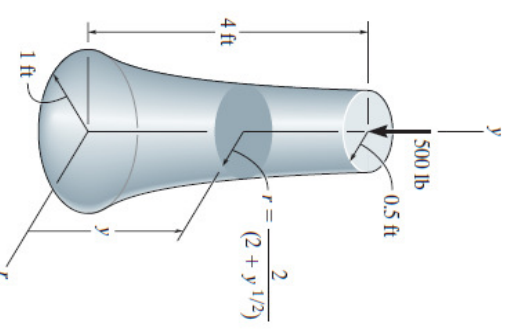


Chương 4: Bài tập_KÉO – NÉN ĐÚNG TÂM

4-27. The circular bar has a variable radius of $r = r_0 e^{\alpha x}$ and is made of a material having a modulus of elasticity of E . Determine the displacement of end A when it is subjected to the axial force P .



*4-28. The pedestal is made in a shape that has a radius defined by the function $r = 2/(2 + y^{1/2})$ ft, where y is in feet. If the modulus of elasticity for the material is $E = 14(10^3)$ psi, determine the displacement of its top when it supports the 500-lb load.



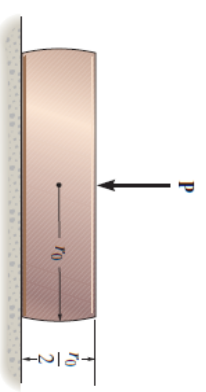
L7A_Cơ học vật liệu (215004)

11

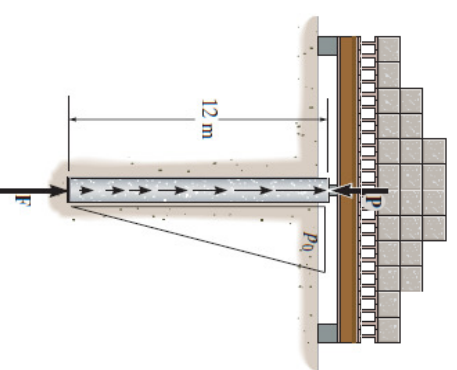


Chương 4: Bài tập_KÉO – NÉN ĐÚNG TÂM

•4-29. The support is made by cutting off the two opposite sides of a sphere that has a radius r_0 . If the original height of the support is $r_0/2$, determine how far it shortens when it supports a load P . The modulus of elasticity is E .



4-30. The weight of the kentledge exerts an axial force of $P = 1500$ kN on the 300-mm diameter high strength concrete bore pile. If the distribution of the resisting skin friction developed from the interaction between the soil and the surface of the pile is approximated as shown, and the resisting bearing force \mathbf{F} is required to be zero, determine the maximum intensity p_0 kN/m for equilibrium. Also, find the corresponding elastic shortening of the pile. Neglect the weight of the pile.



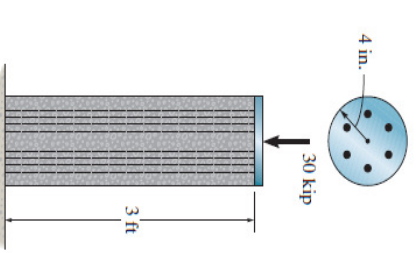
L7A_Cơ học vật liệu (215004)

12

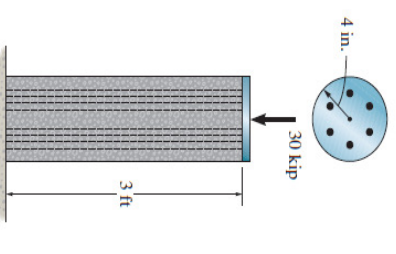


Chương 4: Bài tập_KÉO – NÉN ĐÚNG TÂM

4-31. The column is constructed from high-strength concrete and six A-36 steel reinforcing rods. If it is subjected to an axial force of 30 kip, determine the average normal stress in the concrete and in each rod. Each rod has a diameter of 0.75 in.



*4-32. The column is constructed from high-strength concrete and six A-36 steel reinforcing rods. If it is subjected to an axial force of 30 kip, determine the required diameter of each rod so that one-fourth of the load is carried by the concrete and three-fourths by the steel.



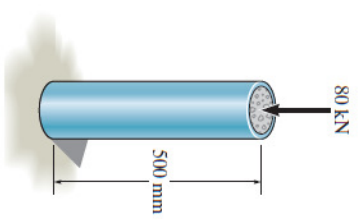
L7A_Cơ học vật liệu (215004)

13

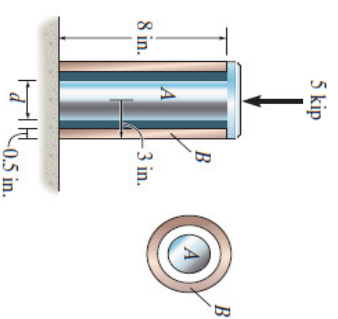


Chương 4: Bài tập_KÉO – NÉN ĐÚNG TÂM

•4-33. The steel pipe is filled with concrete and subjected to a compressive force of 80 kN. Determine the average normal stress in the concrete and the steel due to this loading. The pipe has an outer diameter of 80 mm and an inner diameter of 70 mm. $E_{st} = 200$ GPa, $E_c = 24$ GPa.



4-34. The 304 stainless steel post A has a diameter of $d = 2$ in. and is surrounded by a red brass C83400 tube B. Both rest on the rigid surface. If a force of 5 kip is applied to the rigid cap, determine the average normal stress developed in the post and the tube.



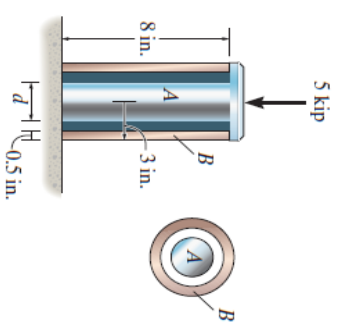
L7A_Cơ học vật liệu (215004)

14

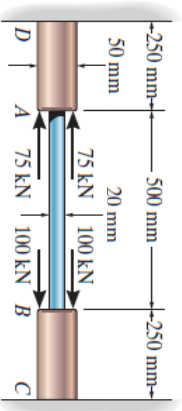


Chương 4: Bài tập_KÉO – NÉN ĐÚNG TÂM

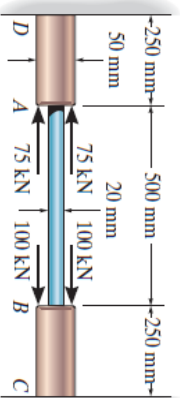
- 4-35. The 304 stainless steel post A is surrounded by a red brass C83400 tube B . Both rest on the rigid surface. If a force of 5 kip is applied to the rigid cap, determine the required diameter d of the steel post so that the load is shared equally between the post and tube.



- *4-36. The composite bar consists of a 20-mm-diameter A-36 steel segment AB and 50-mm-diameter red brass C83400 end segments DA and CB . Determine the average normal stress in each segment due to the applied load.



- 4-37. The composite bar consists of a 20-mm-diameter A-36 steel segment AB and 50-mm-diameter red brass C83400 end segments DA and CB . Determine the displacement of A with respect to B due to the applied load.



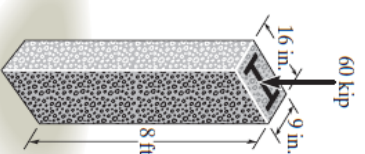
L7A_Cơ học vật liệu (215004)

15

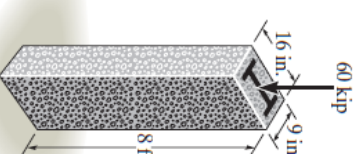


Chương 4: Bài tập_KÉO – NÉN ĐÚNG TÂM

- 4-38. The A-36 steel column, having a cross-sectional area of 18 in^2 , is encased in high-strength concrete as shown. If an axial force of 60 kip is applied to the column, determine the average compressive stress in the concrete and in the steel. How far does the column shorten? It has an original length of 8 ft.



- 4-39. The A-36 steel column is encased in high-strength concrete as shown. If an axial force of 60 kip is applied to the column, determine the required area of the steel so that the force is shared equally between the steel and concrete. How far does the column shorten? It has an original length of 8 ft.



L7A_Cơ học vật liệu (215004)

16

Diagram of a beam with a central section and two end sections. The central section has points A, E, and C. The left end section has point F. The right end section has point D. The beam is supported by a roller at B and a pin at D. A force F is applied at F. Dimensions are given: 0.75 m from B to A, 0.5 m from A to E, 0.5 m from E to C, and 0.75 m from C to D.

Chương 4: Bài tập_KÉO – NÉN ĐÚNG TÂM

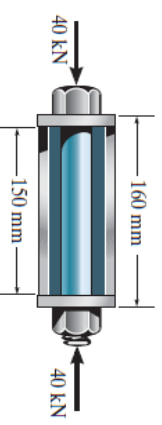
The diagram shows a frame structure with the following dimensions and forces:

- Vertical dimensions: 300 mm (top section), 450 mm (bottom section).
- Horizontal dimensions: 30 mm (width of vertical members), 40 mm (width of horizontal member).
- Forces: 40 kN (upward force at point E), 40 kN (upward force at point B).
- Points: A, B, C, D, E, F, G.

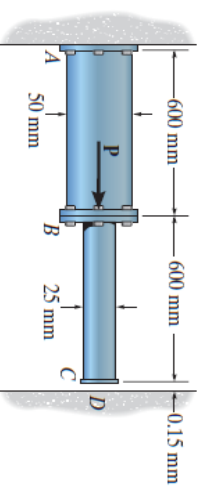


Chương 4: Bài tập_KÉO – NÉN ĐÚNG TÂM

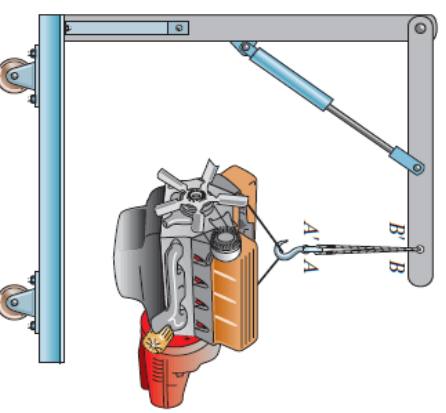
- 4-45. The bolt has a diameter of 20 mm and passes through a tube that has an inner diameter of 50 mm and an outer diameter of 60 mm. If the bolt and tube are made of A-36 steel, determine the normal stress in the tube and bolt when a force of 40 kN is applied to the bolt. Assume the end caps are rigid.



- 4-46. If the gap between C and the rigid wall at D is initially 0.15 mm, determine the support reactions at A and D when the force $P = 200$ kN is applied. The assembly is made of A36 steel.



- 4-47. Two A-36 steel wires are used to support the 650-lb engine. Originally, AB is 32 in. long and $A'B'$ is 32.008 in. long. Determine the force supported by each wire when the engine is suspended from them. Each wire has a cross-sectional area of 0.01 in².



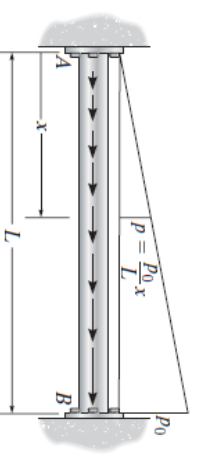
LTA_Cơ học vật liệu (215004)

19

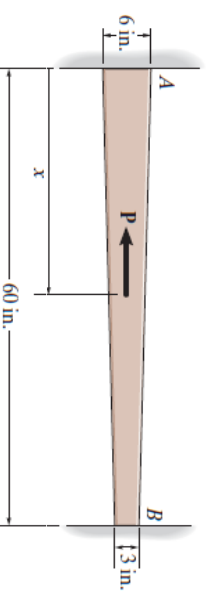


Chương 4: Bài tập_KÉO – NÉN ĐÚNG TÂM

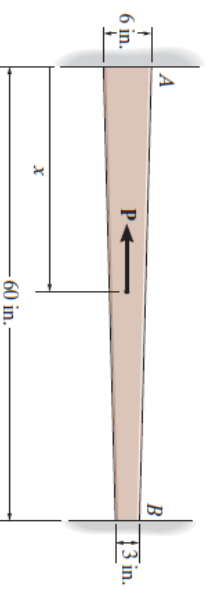
- *4-48. Rod AB has a diameter d and fits snugly between the rigid supports at A and B when it is unloaded. The modulus of elasticity is E . Determine the support reactions at A and B if the rod is subjected to the linearly distributed axial load.



- 4-49. The tapered member is fixed connected at its ends A and B and is subjected to a load $P = 7$ kip at $x = 30$ in. Determine the reactions at the supports. The material is 2 in. thick and is made from 2014-T6 aluminum.



- 4-50. The tapered member is fixed connected at its ends A and B and is subjected to a load P . Determine the location x of the load and its greatest magnitude so that the average normal stress in the bar does not exceed $\sigma_{\text{allow}} = 4$ ksi. The member is 2 in. thick.



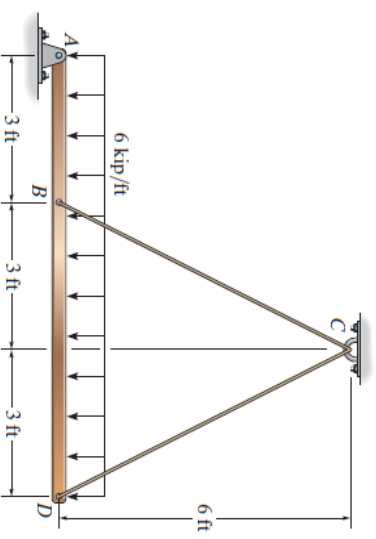
LTA_Cơ học vật liệu (215004)

20

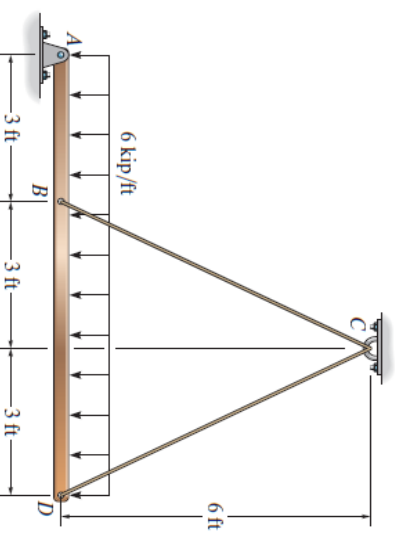


Chương 4: Bài tập_KÉO – NÉN ĐÚNG TÂM

4-51. The rigid bar supports the uniform distributed load of 6 kip/ft. Determine the force in each cable if each cable has a cross-sectional area of 0.05 in^2 , and $E = 31(10^3) \text{ ksi}$.



*4-52. The rigid bar is originally horizontal and is supported by two cables each having a cross-sectional area of 0.05 in^2 , and $E = 31(10^3) \text{ ksi}$. Determine the slight rotation of the bar when the uniform load is applied.



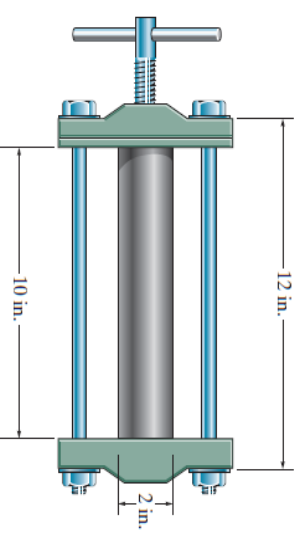
L7A_Cơ học vật liệu (215004)

21

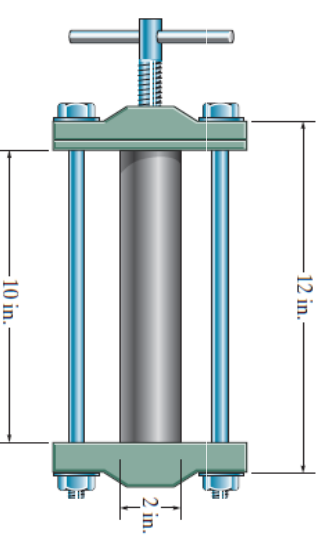


Chương 4: Bài tập_KÉO – NÉN ĐÚNG TÂM

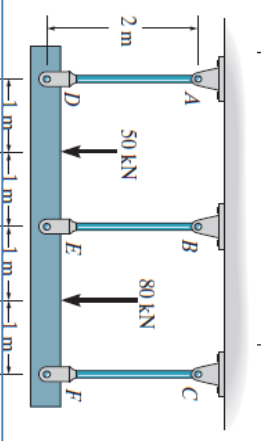
•4-53. The press consists of two rigid heads that are held together by the two A-36 steel $\frac{1}{2}$ -in.-diameter rods. A 6061-T6-solid-aluminum cylinder is placed in the press and the screw is adjusted so that it just presses up against the cylinder. If it is then tightened one-half turn, determine the average normal stress in the rods and in the cylinder. The single-threaded screw on the bolt has a lead of 0.01 in. *Note:* The lead represents the distance the screw advances along its axis for one complete turn of the screw.



4-54. The press consists of two rigid heads that are held together by the two A-36 steel $\frac{1}{2}$ -in.-diameter rods. A 6061-T6-solid-aluminum cylinder is placed in the press and the screw is adjusted so that it just presses up against the cylinder. Determine the angle through which the screw can be turned before the rods or the specimen begin to yield. The single-threaded screw on the bolt has a lead of 0.01 in. *Note:* The lead represents the distance the screw advances along its axis for one complete turn of the screw.



4-55. The three suspender bars are made of A-36 steel and have equal cross-sectional areas of 450 mm^2 . Determine the average normal stress in each bar if the rigid beam is subjected to the loading shown.



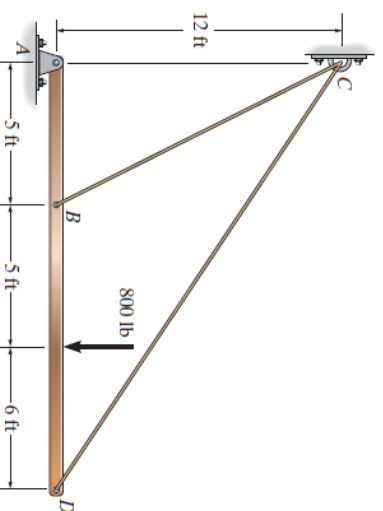
L7A_Cơ học vật liệu (215004)

22

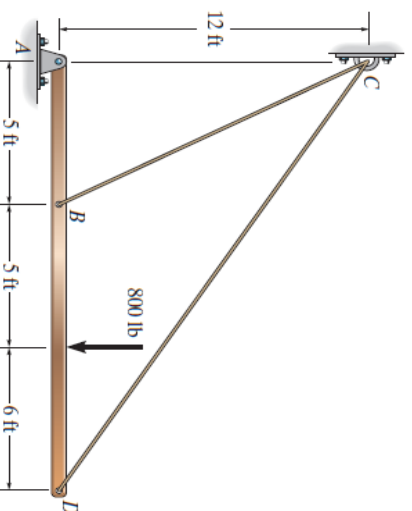


Chương 4: Bài tập_KÉO – NÉN ĐÚNG TÂM

*4-56. The rigid bar supports the 800-lb load. Determine the normal stress in each A-36 steel cable if each cable has a cross-sectional area of 0.04 in^2 .



•4-57. The rigid bar is originally horizontal and is supported by two A-36 steel cables each having a cross-sectional area of 0.04 in^2 . Determine the rotation of the bar when the 800-lb load is applied.

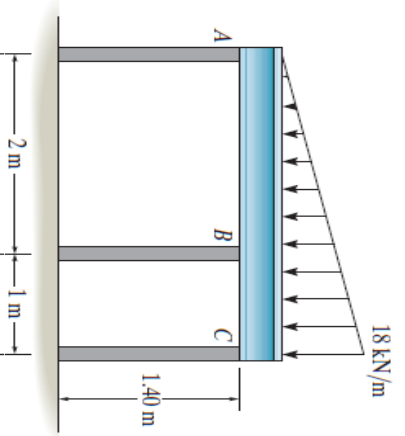


L7A_Cơ học vật liệu (215004)

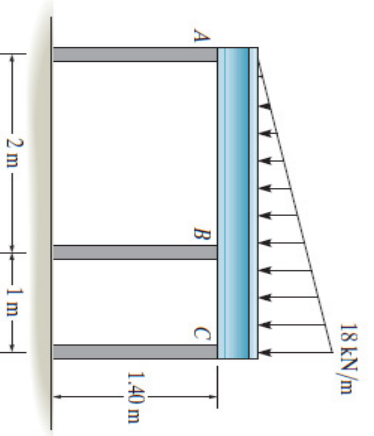


Chương 4: Bài tập_KÉO – NÉN ĐÚNG TÂM

4-58. The horizontal beam is assumed to be rigid and supports the distributed load shown. Determine the vertical reactions at the supports. Each support consists of a wooden post having a diameter of 120 mm and an unloaded (original) length of 1.40 m. Take $E_w = 12 \text{ GPa}$.

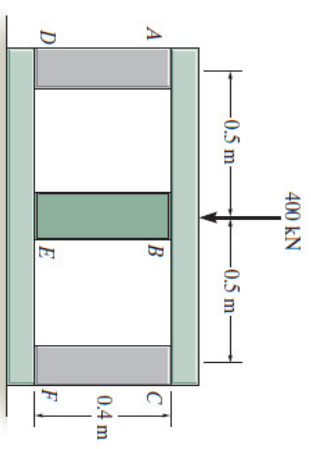


4-59. The horizontal beam is assumed to be rigid and supports the distributed load shown. Determine the angle of tilt of the beam after the load is applied. Each support consists of a wooden post having a diameter of 120 mm and an unloaded (original) length of 1.40 m. Take $E_w = 12 \text{ GPa}$.

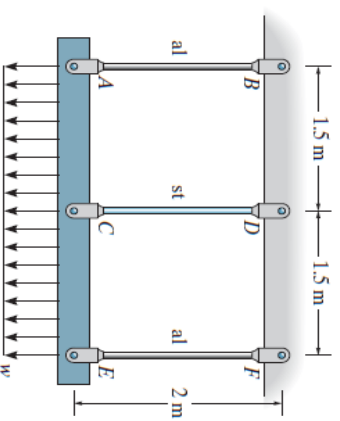


L7A_Cơ học vật liệu (215004)

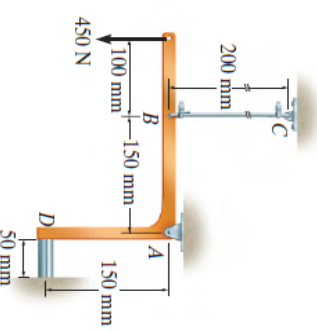
*4-60. The assembly consists of two posts AD and CF made of A-36 steel and having a cross-sectional area of 1000 mm^2 , and a 2014-T6 aluminum post BE having a cross-sectional area of 1500 mm^2 . If a central load of 400 kN is applied to the rigid cap, determine the normal stress in each post. There is a small gap of 0.1 mm between the post BE and the rigid member ABC .



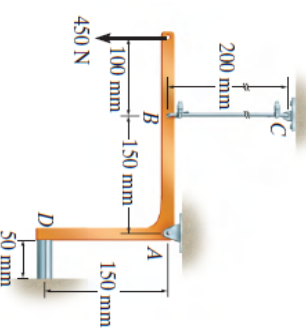
•4-61. The distributed loading is supported by the three suspender bars AB and EF are made of aluminum and CD is made of steel. If each bar has a cross-sectional area of 450 mm^2 , determine the maximum intensity w of the distributed loading so that an allowable stress of $(\sigma_{\text{allow}})_{\text{st}} = 180 \text{ MPa}$ in the steel and $(\sigma_{\text{allow}})_{\text{al}} = 94 \text{ MPa}$ in the aluminum is not exceeded. $E_{\text{st}} = 200 \text{ GPa}$, $E_{\text{al}} = 70 \text{ GPa}$. Assume ACE is rigid.



4-62. The rigid link is supported by a pin at A , a steel wire BC having an unstretched length of 200 mm and cross-sectional area of 22.5 mm^2 , and a short aluminum block having an unloaded length of 50 mm and cross-sectional area of 40 mm^2 . If the link is subjected to the vertical load shown, determine the average normal stress in the wire and the block. $E_{\text{st}} = 200 \text{ GPa}$, $E_{\text{al}} = 70 \text{ GPa}$.



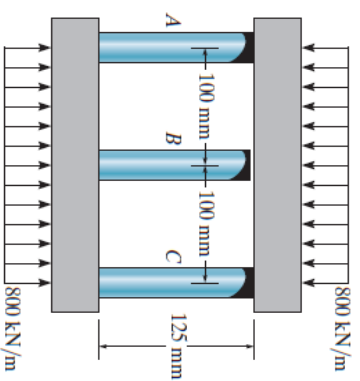
4-63. The rigid link is supported by a pin at A , a steel wire BC having an unstretched length of 200 mm and cross-sectional area of 22.5 mm^2 , and a short aluminum block having an unloaded length of 50 mm and cross-sectional area of 40 mm^2 . If the link is subjected to the vertical load shown, determine the rotation of the link about the pin A . Report the answer in radians. $E_{\text{st}} = 200 \text{ GPa}$, $E_{\text{al}} = 70 \text{ GPa}$.



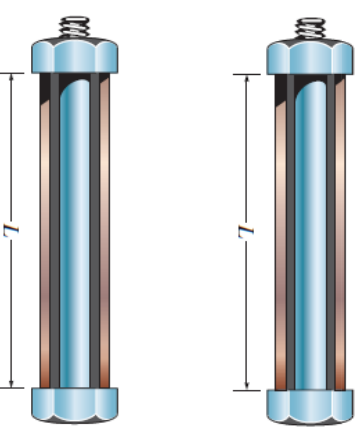


Chương 4: Bài tập_KÉO – NÉN ĐÚNG TÂM

*4-64. The center post B of the assembly has an original length of 124.7 mm, whereas posts A and C have a length of 125 mm. If the caps on the top and bottom can be considered rigid, determine the average normal stress in each post. The posts are made of aluminum and have a cross-sectional area of 400 mm^2 . $E_{al} = 70 \text{ GPa}$.



•4-65. The assembly consists of an A-36 steel bolt and a C83400 red brass tube. If the nut is drawn up snug against the tube so that $L = 75 \text{ mm}$, then turned an additional amount so that it advances 0.02 mm on the bolt, determine the force in the bolt and the tube. The bolt has a diameter of 7 mm and the tube has a cross-sectional area of 100 mm^2 .



4-66. The assembly consists of an A-36 steel bolt and a C83400 red brass tube. The nut is drawn up snug against the tube so that $L = 75 \text{ mm}$. Determine the maximum additional amount of advance of the nut on the bolt so that none of the material will yield. The bolt has a diameter of 7 mm and the tube has a cross-sectional area of 100 mm^2 .

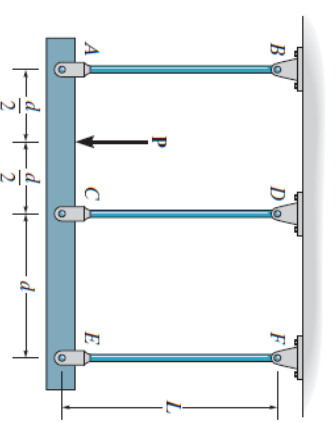
L7A_Cơ học vật liệu (215004)

27



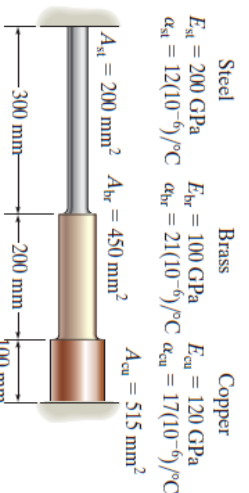
Chương 4: Bài tập_KÉO – NÉN ĐÚNG TÂM

4-67. The three suspender bars are made of the same material and have equal cross-sectional areas A . Determine the average normal stress in each bar if the rigid beam ACE is subjected to the force P .



*4-68. A steel surveyor's tape is to be used to measure the length of a line. The tape has a rectangular cross section of 0.05 in. by 0.2 in. and a length of 100 ft when $T_1 = 60^\circ\text{F}$ and the tension or pull on the tape is 20 lb. Determine the true length of the line if the tape shows the reading to be 463.25 ft when used with a pull of 35 lb at $T_2 = 90^\circ\text{F}$. The ground on which it is placed is flat. $\alpha_{st} = 9.60(10^{-6})/^\circ\text{F}$, $E_{st} = 29(10^3) \text{ ksi}$.

•4-69. Three bars each made of different materials are connected together and placed between two walls when the temperature is $T_1 = 12^\circ\text{C}$. Determine the force exerted on the (rigid) supports when the temperature becomes $T_2 = 18^\circ\text{C}$. The material properties and cross-sectional area of each bar are given in the figure.



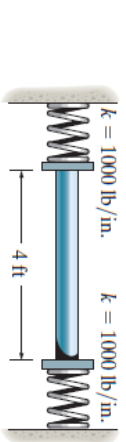
L7A_Cơ học vật liệu (215004)

28

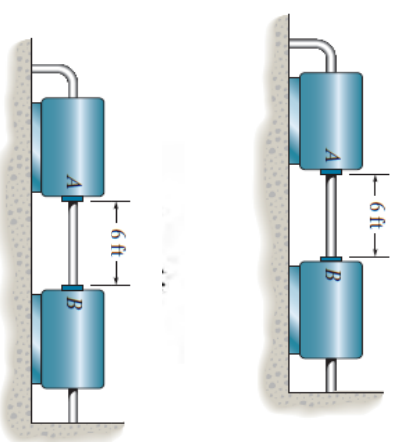


Chương 4: Bài tập_KÉO – NÉN ĐÚNG TÂM

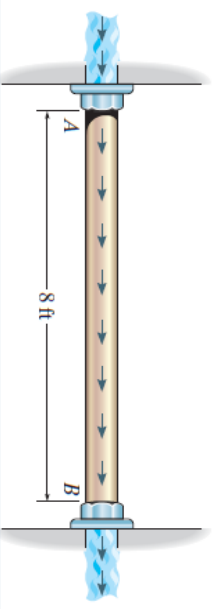
4-70. The rod is made of A-36 steel and has a diameter of 0.25 in. If the rod is 4 ft long when the springs are compressed 0.5 in, and the temperature of the rod is $T = 40^\circ\text{F}$, determine the force in the rod when its temperature is $T = 160^\circ\text{F}$.



4-71. A 6-ft-long steam pipe is made of A-36 steel with $\sigma_y = 40$ ksi. It is connected directly to two turbines A and B as shown. The pipe has an outer diameter of 4 in. and a wall thickness of 0.25 in. The connection was made at $T_1 = 70^\circ\text{F}$. If the turbines' points of attachment are assumed rigid, determine the force the pipe exerts on the turbines when the steam and thus the pipe reach a temperature of $T_2 = 275^\circ\text{F}$.



***4-72.** A 6-ft-long steam pipe is made of A-36 steel with $\sigma_y = 40$ ksi. It is connected directly to two turbines A and B as shown. The pipe has an outer diameter of 4 in. and a wall thickness of 0.25 in. The connection was made at $T_1 = 70^\circ\text{F}$. If the turbines' points of attachment are assumed to have a stiffness of $k = 80(10^3)$ kip/in, determine the force the pipe exerts on the turbines when the steam and thus the pipe reach a temperature of $T_2 = 275^\circ\text{F}$.



•4-73. The pipe is made of A-36 steel and is connected to the collars at A and B . When the temperature is 60°F , there is no axial load in the pipe. If hot gas traveling through the pipe causes its temperature to rise by $\Delta T = (40 + 15x)^\circ\text{F}$, where x is in feet, determine the average normal stress in the pipe. The inner diameter is 2 in., the wall thickness is 0.15 in.

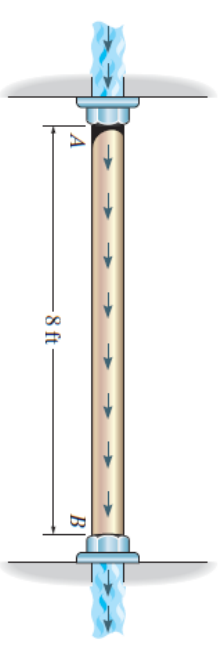
L7A_Cơ học vật liệu (215004)

29

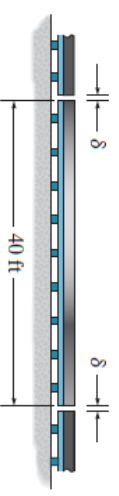


Chương 4: Bài tập_KÉO – NÉN ĐÚNG TÂM

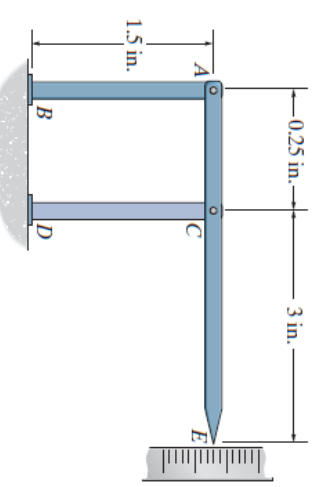
4-74. The bronze C86100 pipe has an inner radius of 0.5 in. and a wall thickness of 0.2 in. If the gas flowing through it changes the temperature of the pipe uniformly from $T_A = 200^\circ\text{F}$ at A to $T_B = 60^\circ\text{F}$ at B , determine the axial force it exerts on the walls. The pipe was fitted between the walls when $T = 60^\circ\text{F}$.



4-75. The 40-ft-long A-36 steel rails on a train track are laid with a small gap between them to allow for thermal expansion. Determine the required gap δ so that the rails just touch one another when the temperature is increased from $T_1 = -20^\circ\text{F}$ to $T_2 = 90^\circ\text{F}$. Using this gap, what would be the axial force in the rails if the temperature were to rise to $T_3 = 110^\circ\text{F}$? The cross-sectional area of each rail is 5.10 in^2 .



***4-76.** The device is used to measure a change in temperature. Bars AB and CD are made of A-36 steel and 2014-T6 aluminum alloy respectively. When the temperature is at 75°F , ACE is in the horizontal position. Determine the vertical displacement of the pointer at E when the temperature rises to 150°F .



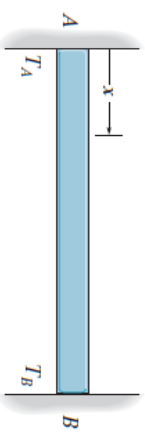
L7A_Cơ học vật liệu (215004)

30

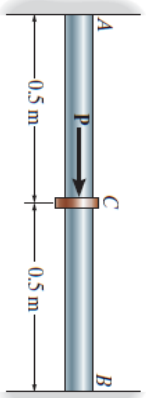


Chương 4: Bài tập_KÉO – NÉN ĐÚNG TÂM

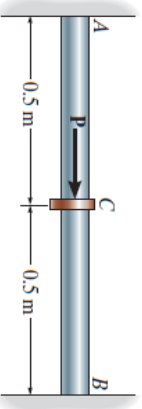
•4-77. The bar has a cross-sectional area A , length L , modulus of elasticity E , and coefficient of thermal expansion α . The temperature of the bar changes uniformly along its length from T_A at A to T_B at B so that at any point x along the bar $T = T_A + x(T_B - T_A)/L$. Determine the force the bar exerts on the rigid walls. Initially no axial force is in the bar and the bar has a temperature of T_A .



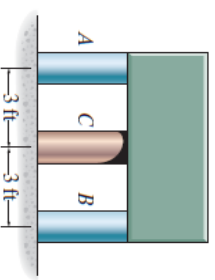
4-78. The A-36 steel rod has a diameter of 50 mm and is lightly attached to the rigid supports at A and B when $T_1 = 80^\circ\text{C}$. If the temperature becomes $T_2 = 20^\circ\text{C}$ and an axial force of $P = 200\text{ kN}$ is applied to its center, determine the reactions at A and B .



4-79. The A-36 steel rod has a diameter of 50 mm and is lightly attached to the rigid supports at A and B when $T_1 = 50^\circ\text{C}$. Determine the force P that must be applied to the collar at its midpoint so that, when $T_2 = 30^\circ\text{C}$, the reaction at B is zero.



*4-80. The rigid block has a weight of 80 kip and is to be supported by posts A and B , which are made of A-36 steel, and the post C , which is made of C83400 red brass. If all the posts have the same original length before they are loaded, determine the average normal stress developed in each post when post C is heated so that its temperature is increased by 20°F . Each post has a cross-sectional area of 8 in^2 .



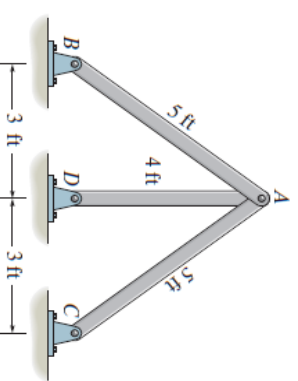
L7A_Cơ học vật liệu (215004)

31

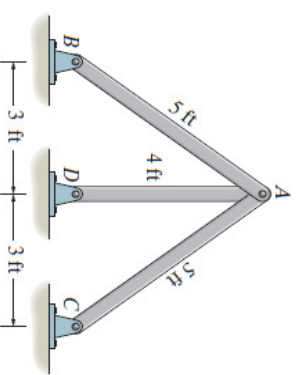


Chương 4: Bài tập_KÉO – NÉN ĐÚNG TÂM

•4-81. The three bars are made of A-36 steel and form a pin-connected truss. If the truss is constructed when $T_1 = 50^\circ\text{F}$, determine the force in each bar when $T_2 = 110^\circ\text{F}$. Each bar has a cross-sectional area of 2 in^2 .



4-82. The three bars are made of A-36 steel and form a pin-connected truss. If the truss is constructed when $T_1 = 50^\circ\text{F}$, determine the vertical displacement of joint A when $T_2 = 150^\circ\text{F}$. Each bar has a cross-sectional area of 2 in^2 .



(1)

$$(\delta_T')_{AB} - (\delta_T')_{AB} = (\delta_T')_{AD} + (\delta_T')_{AC}$$

However, $\delta_{AB} = \delta'_{AB} \cos \theta$;

$$\delta'_{AB} = \frac{\delta_{AB}}{\cos \theta} = \frac{5}{4} \delta_{AB}$$

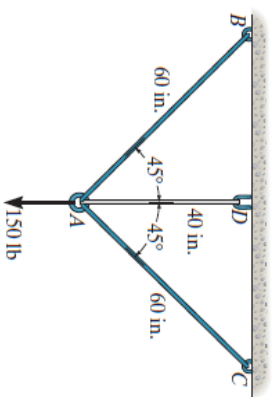
L7A_Cơ học vật liệu (215004)

32



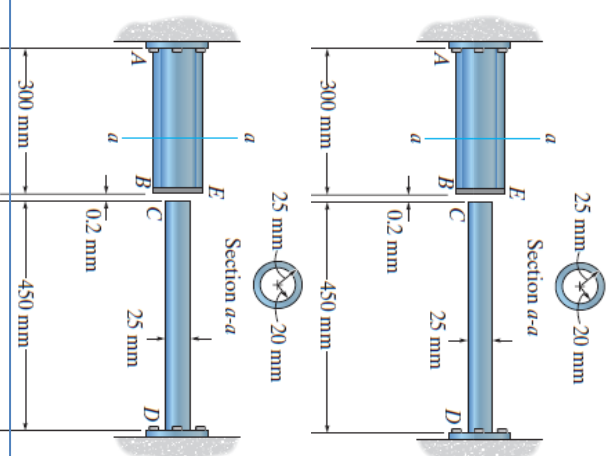
Chương 4: Bài tập_KÉO – NÉN ĐÚNG TÂM

4-83. The wires AB and AC are made of steel, and wire AD is made of copper. Before the 150-lb force is applied, AB and AC are each 60 in. long and AD is 40 in. long. If the temperature is increased by 80°F , determine the force in each wire needed to support the load. Take $E_{\text{st}} = 29(10^3)$ ksi, $E_{\text{cu}} = 17(10^3)$ ksi, $\alpha_{\text{st}} = 8(10^{-6})/^\circ\text{F}$, $\alpha_{\text{cu}} = 9.60(10^{-6})/^\circ\text{F}$. Each wire has a cross-sectional area of 0.0123 in^2 .



***4-84.** The AM1004-T61 magnesium alloy tube AB is capped with a rigid plate E . The gap between E and end C of the 6061-T6 aluminum alloy solid circular rod CD is 0.2 mm when the temperature is at 30°C . Determine the normal stress developed in the tube and the rod if the temperature rises to 80°C . Neglect the thickness of the rigid cap.

•4-85. The AM1004-T61 magnesium alloy tube AB is capped with a rigid plate. The gap between E and end C of the 6061-T6 aluminum alloy solid circular rod CD is 0.2 mm when the temperature is at 30°C . Determine the highest temperature to which it can be raised without causing yielding either in the tube or the rod. Neglect the thickness of the rigid cap.



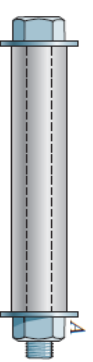
L7A_Cơ học vật liệu (215004)

33

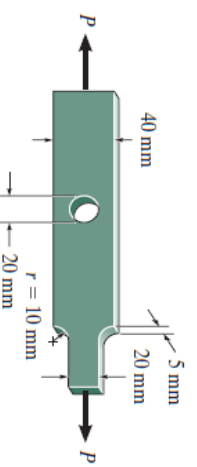
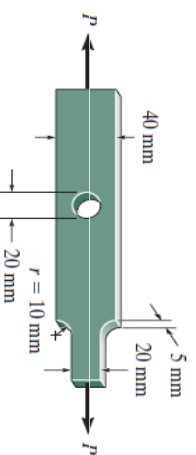


Chương 4: Bài tập_KÉO – NÉN ĐÚNG TÂM

4-86. The steel bolt has a diameter of 7 mm and fits through an aluminum sleeve as shown. The sleeve has an inner diameter of 8 mm and an outer diameter of 10 mm. The nut at A is adjusted so that it just presses up against the sleeve. If the assembly is originally at a temperature of $T_1 = 20^\circ\text{C}$ and then is heated to a temperature of $T_2 = 100^\circ\text{C}$, determine the average normal stress in the bolt and the sleeve. $E_{\text{st}} = 200\text{ GPa}$, $E_{\text{al}} = 70\text{ GPa}$, $\alpha_{\text{st}} = 14(10^{-6})/^\circ\text{C}$, $\alpha_{\text{al}} = 23(10^{-6})/^\circ\text{C}$.



4-87. Determine the maximum normal stress developed in the bar when it is subjected to a tension of $P = 8\text{ kN}$.



***4-88.** If the allowable normal stress for the bar is $\sigma_{\text{allow}} = 120\text{ MPa}$, determine the maximum axial force P that can be applied to the bar.

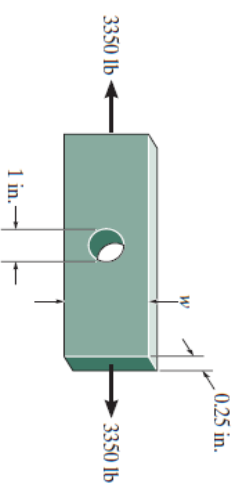
L7A_Cơ học vật liệu (215004)

34

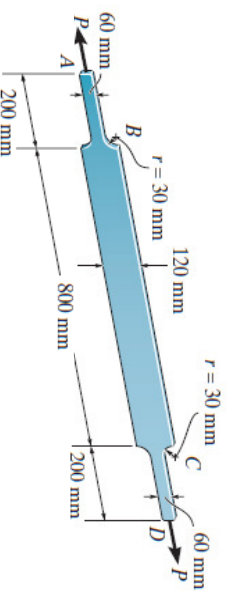


Chương 4: Bài tập_KÉO – NÉN ĐÚNG TÂM

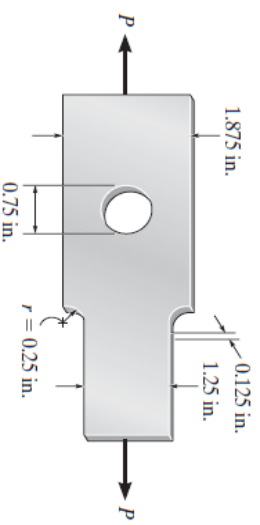
- 4-89. The member is to be made from a steel plate that is 0.25 in. thick. If a 1-in. hole is drilled through its center, determine the approximate width w of the plate so that it can support an axial force of 3350 lb. The allowable stress is $\sigma_{\text{allow}} = 22$ ksi.



- 4-90. The A-36 steel plate has a thickness of 12 mm. If there are shoulder fillets at B and C , and $\sigma_{\text{allow}} = 150$ MPa, determine the maximum axial load P that it can support. Calculate its elongation, neglecting the effect of the fillets.



- 4-91. Determine the maximum axial force P that can be applied to the bar. The bar is made from steel and has an allowable stress of $\sigma_{\text{allow}} = 21$ ksi.



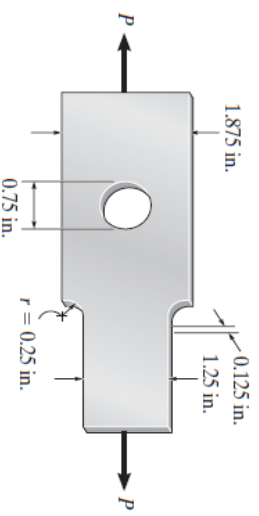
L7A_Cơ học vật liệu (215004)

35

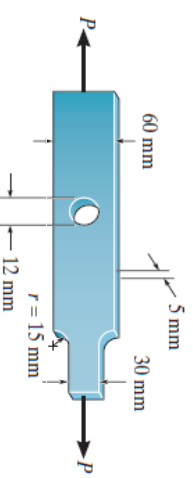


Chương 4: Bài tập_KÉO – NÉN ĐÚNG TÂM

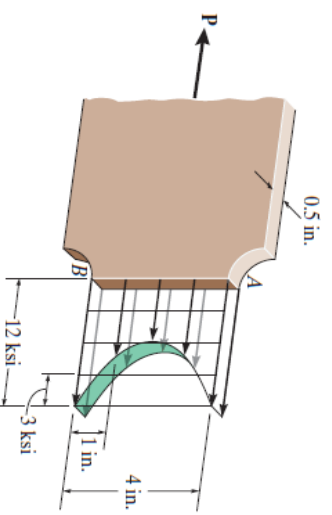
- *4-92. Determine the maximum normal stress developed in the bar when it is subjected to a tension of $P = 2$ kip.



- 4-93. Determine the maximum normal stress developed in the bar when it is subjected to a tension of $P = 8$ kN.



- 4-94. The resulting stress distribution along section AB for the bar is shown. From this distribution, determine the approximate resultant axial force P applied to the bar. Also, what is the stress-concentration factor for this geometry?



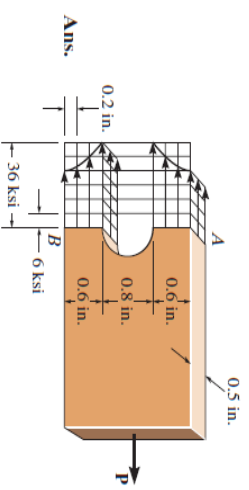
L7A_Cơ học vật liệu (215004)

36

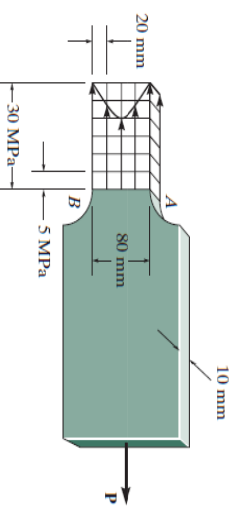


Chương 4: Bài tập_KÉO – NÉN ĐÚNG TÂM

4-95. The resulting stress distribution along section AB for the bar is shown. From this distribution, determine the approximate resultant axial force P applied to the bar. Also, what is the stress-concentration factor for this geometry?

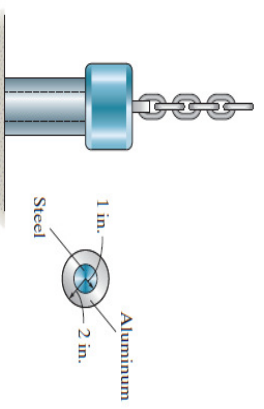


***4-96.** The resulting stress distribution along section AB for the bar is shown. From this distribution, determine the approximate resultant axial force P applied to the bar. Also, what is the stress-concentration factor for this geometry?



Number of squares = 19

***4-97.** The 300-kip weight is slowly set on the top of a post made of 2014-T6 aluminum with an A-36 steel core. If both materials can be considered elastic perfectly plastic, determine the stress in each material.



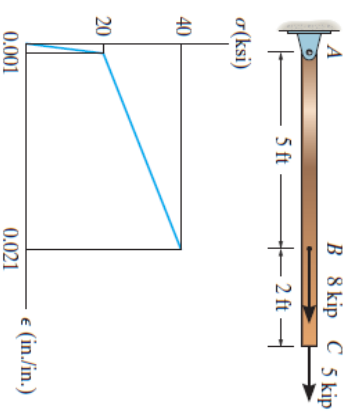
L7A_Cơ học vật liệu (215004)

37

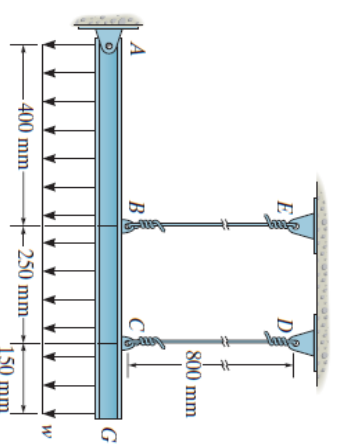


Chương 4: Bài tập_KÉO – NÉN ĐÚNG TÂM

4-98. The bar has a cross-sectional area of 0.5 in^2 and is made of a material that has a stress-strain diagram that can be approximated by the two line segments shown. Determine the elongation of the bar due to the applied loading.



4-99. The rigid bar is supported by a pin at A and two steel wires, each having a diameter of 4 mm. If the yield stress for the wires is $\sigma_Y = 530 \text{ MPa}$, and $E_{st} = 200 \text{ GPa}$, determine the intensity of the distributed load w that can be placed on the beam and will just cause wire EB to yield. What is the displacement of point G for this case? For the calculation, assume that the steel is elastic perfectly plastic.



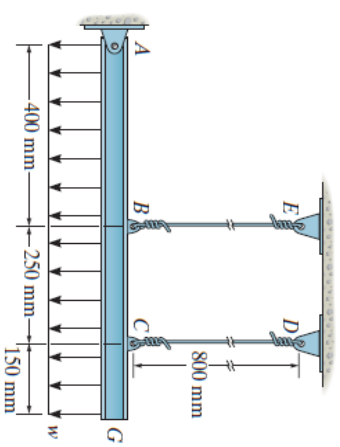
L7A_Cơ học vật liệu (215004)

38

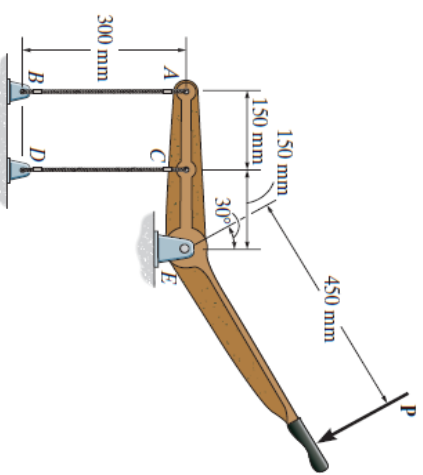


Chương 4: Bài tập_KÉO – NÉN ĐÚNG TÂM

*4-100. The rigid bar is supported by a pin at A and two steel wires, each having a diameter of 4 mm. If the yield stress for the wires is $\sigma_Y = 530$ MPa, and $E_{st} = 200$ GPa, determine (a) the intensity of the distributed load w that can be placed on the beam that will cause only one of the wires to start to yield and (b) the smallest intensity of the distributed load that will cause both wires to yield. For the calculation, assume that the steel is elastic perfectly plastic.



•4-101. The rigid lever arm is supported by two A-36 steel wires having the same diameter of 4 mm. If a force of $P = 3$ kN is applied to the handle, determine the force developed in both wires and their corresponding elongations. Consider A-36 steel as an elastic-perfectly plastic material.



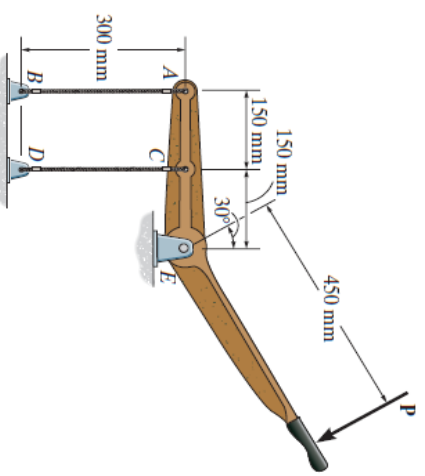
L7A_Cơ học vật liệu (215004)

39

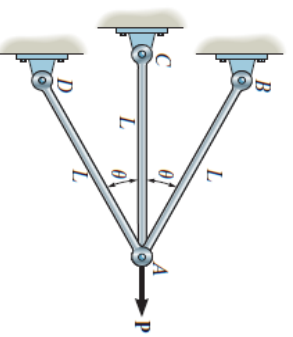


Chương 4: Bài tập_KÉO – NÉN ĐÚNG TÂM

4-102. The rigid lever arm is supported by two A-36 steel wires having the same diameter of 4 mm. Determine the smallest force P that will cause (a) only one of the wires to yield; (b) both wires to yield. Consider A-36 steel as an elastic-perfectly plastic material.



4-103. The three bars are pinned together and subjected to the load P . If each bar has a cross-sectional area A , length L , and is made from an elastic perfectly plastic material, for which the yield stress is σ_Y , determine the largest load (ultimate load) that can be supported by the bars, i.e., the load P that causes all the bars to yield. Also, what is the horizontal displacement of point A when the load reaches its ultimate value? The modulus of elasticity is E .



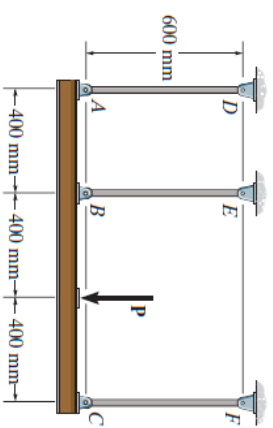
L7A_Cơ học vật liệu (215004)

40

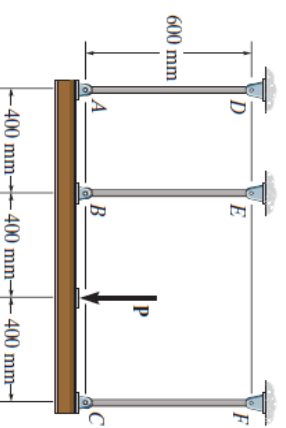


Chương 4: Bài tập_KÉO – NÉN ĐÚNG TÂM

***4-104.** The rigid beam is supported by three 25-mm diameter A-36 steel rods. If the beam supports the force of $P = 230$ kN, determine the force developed in each rod. Consider the steel to be an elastic perfectly-plastic material.



•4-105. The rigid beam is supported by three 25-mm diameter A-36 steel rods. If the force of $P = 230$ kN is applied on the beam and removed, determine the residual stresses in each rod. Consider the steel to be an elastic perfectly-plastic material.



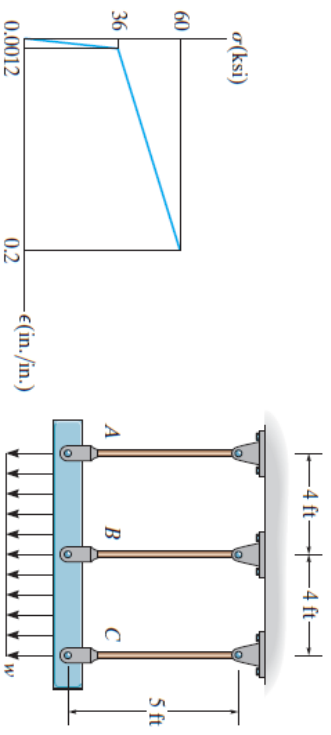
L7A_Cơ học vật liệu (215004)

4.1

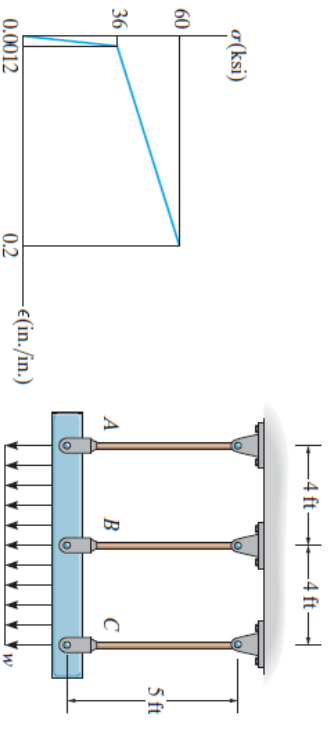


Chương 4: Bài tập_KÉO – NÉN ĐÚNG TÂM

4-106. The distributed loading is applied to the rigid beam, which is supported by the three bars. Each bar has a cross-sectional area of 1.25 in² and is made from a material having a stress-strain diagram that can be approximated by the two line segments shown. If a load of $w = 25$ kip/ft is applied to the beam, determine the stress in each bar and the vertical displacement of the beam.



4-107. The distributed loading is applied to the rigid beam, which is supported by the three bars. Each bar has a cross-sectional area of 0.75 in² and is made from a material having a stress-strain diagram that can be approximated by the two line segments shown. Determine the intensity of the distributed loading w needed to cause the beam to be displaced downward 1.5 in.



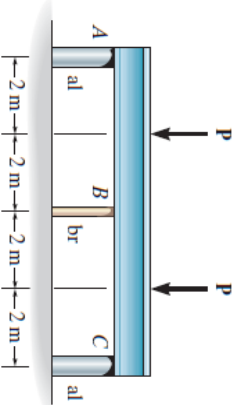
L7A_Cơ học vật liệu (215004)

4.2

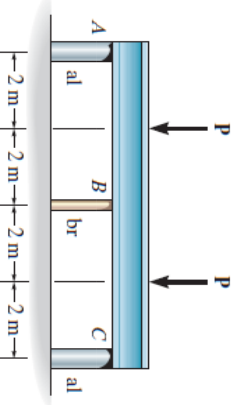


Chương 4: Bài tập_KÉO – NÉN ĐÚNG TÂM

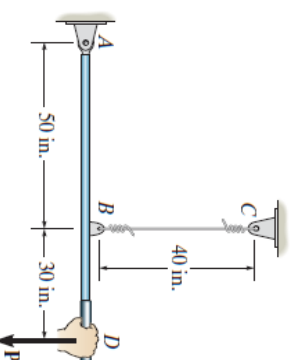
*4-108. The rigid beam is supported by the three posts A , B , and C of equal length. Posts A and C have a diameter of 75 mm and are made of aluminum, for which $E_{al} = 70$ GPa and $(\sigma_Y)_{al} = 20$ MPa. Post B has a diameter of 20 mm and is made of brass, for which $E_{br} = 100$ GPa and $(\sigma_Y)_{br} = 590$ MPa. Determine the smallest magnitude of P so that (a) only rods A and C yield and (b) all the posts yield.



•4-109. The rigid beam is supported by the three posts A , B , and C . Posts A and C have a diameter of 60 mm and are made of aluminum, for which $E_{al} = 70$ GPa and $(\sigma_Y)_{al} = 20$ MPa. Post B is made of brass, for which $E_{br} = 100$ GPa and $(\sigma_Y)_{br} = 590$ MPa. If $P = 130$ kN, determine the largest diameter of post B so that all the posts yield at the same time.



4-110. The wire BC has a diameter of 0.125 in. and the material has the stress-strain characteristics shown in the figure. Determine the vertical displacement of the handle at D if the pull at the grip is slowly increased and reaches a magnitude of (a) $P = 450$ lb, (b) $P = 600$ lb.



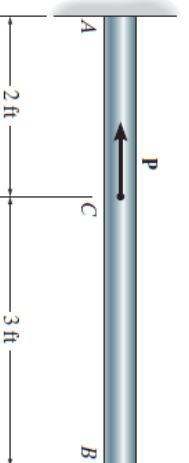
L7A_Cơ học vật liệu (215004)

43

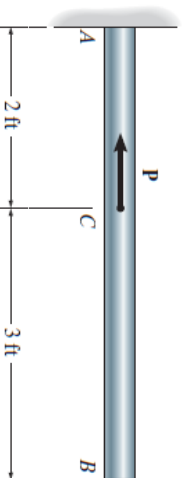


Chương 4: Bài tập_KÉO – NÉN ĐÚNG TÂM

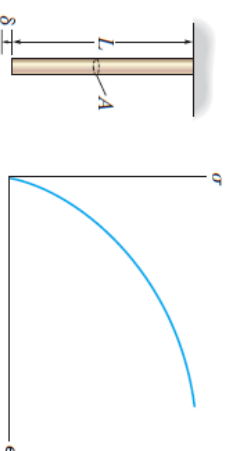
4-111. The bar having a diameter of 2 in. is fixed connected at its ends and supports the axial load P . If the material is elastic perfectly plastic as shown by the stress-strain diagram, determine the smallest load P needed to cause segment CB to yield. If this load is released, determine the permanent displacement of point C .



*4-112. Determine the elongation of the bar in Prob. 4-111 when both the load P and the supports are removed.



•4-113. A material has a stress-strain diagram that can be described by the curve $\sigma = c\epsilon^{1/2}$. Determine the deflection δ of the end of a rod made from this material if it has a length L , cross-sectional area A , and a specific weight γ .



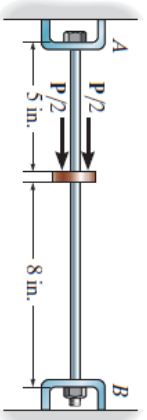
L7A_Cơ học vật liệu (215004)

44

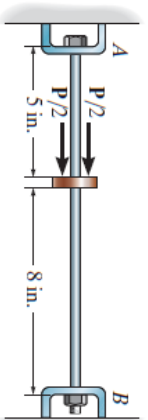


Chương 4: Bài tập_KÉO – NÉN ĐÚNG TÂM

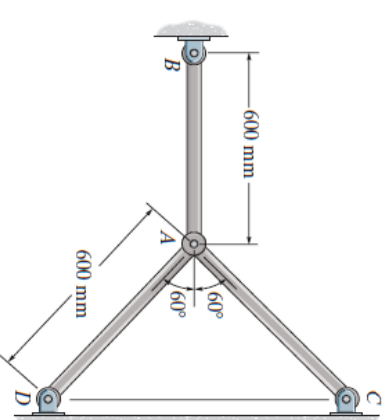
4-114. The 2014-T6 aluminum rod has a diameter of 0.5 in. and is lightly attached to the rigid supports at A and B when $T_1 = 70^\circ\text{F}$. If the temperature becomes $T_2 = -10^\circ\text{F}$, and an axial force of $P = 16\text{ lb}$ is applied to the rigid collar as shown, determine the reactions at A and B .



4-115. The 2014-T6 aluminum rod has a diameter of 0.5 in. and is lightly attached to the rigid supports at A and B when $T_1 = 70^\circ\text{F}$. Determine the force P that must be applied to the collar so that, when $T = 0^\circ\text{F}$, the reaction at B is zero.



***4-116.** The rods each have the same 25-mm diameter and 600-mm length. If they are made of A-36 steel, determine the forces developed in each rod when the temperature increases to 50°C .



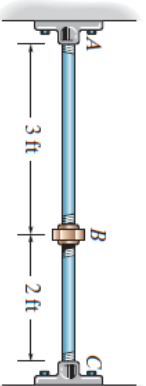
L7A_Cơ học vật liệu (215004)

45

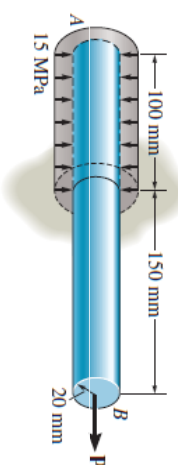


Chương 4: Bài tập_KÉO – NÉN ĐÚNG TÂM

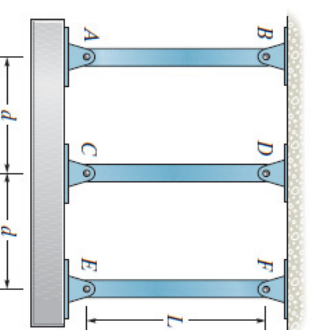
•4-117. Two A-36 steel pipes, each having a cross-sectional area of 0.32 in^2 , are screwed together using a union at B as shown. Originally the assembly is adjusted so that no load is on the pipe. If the union is then tightened so that its screw, having a lead of 0.15 in. , undergoes two full turns, determine the average normal stress developed in the pipe. Assume that the union at B and couplings at A and C are rigid. Neglect the size of the union. *Note:* The lead will cause the pipe, when *unloaded*, to shorten 0.15 in. when the union is rotated one revolution.



4-118. The brass plug is force-fitted into the rigid casting. The uniform normal bearing pressure on the plug is estimated to be 15 MPa . If the coefficient of static friction between the plug and casting is $\mu_s = 0.3$, determine the axial force P needed to pull the plug out. Also, calculate the displacement of end B relative to end A just before the plug starts to slip out. $E_{br} = 98\text{ GPa}$.



4-119. The assembly consists of two bars AB and CD of the same material having a modulus of elasticity E_1 and coefficient of thermal expansion α_1 , and a bar EF having a modulus of elasticity E_2 and coefficient of thermal expansion α_2 . All the bars have the same length L and cross-sectional area A . If the rigid beam is originally horizontal at temperature T_1 , determine the angle it makes with the horizontal when the temperature is increased to T_2 .



L7A_Cơ học vật liệu (215004)

46

***4-120.** The rigid link is supported by a pin at *A* and two A-36 steel wires, each having an unstretched length of 12 in. and cross-sectional area of 0.0125 in². Determine the force developed in the wires when the link supports the vertical load of 350 lb.

